

# Question Paper Preview

## Notations :

- 1.Options shown in green color and with ✓ icon are correct.
- 2.Options shown in red color and with ✗ icon are incorrect.

Subject Name :	Office Executive
Creation Date :	2021-09-09 12:01:48
Duration :	90
Total Marks :	85
Display Marks:	Yes
Share Answer Key With Delivery Engine :	No
Actual Answer Key :	Yes
Calculator :	None
Magnifying Glass Required? :	No
Ruler Required? :	No
Eraser Required? :	No
Scratch Pad Required? :	No
Rough Sketch/Notepad Required? :	No
Protractor Required? :	No
Show Watermark on Console? :	Yes
Highlighter :	No
Auto Save on Console? ( SA type of questions will be always auto saved ) :	No

## Office Executive

Group Number : 1

Group Id :	540626789
Group Maximum Duration :	0
Group Minimum Duration :	90
Show Attended Group? :	No
Edit Attended Group? :	No
Break time :	0
Group Marks :	85
Is this Group for Examiner? :	No

## General Awareness

Section Id :	540626986
Section Number :	1
Section type :	Online
Mandatory or Optional :	Mandatory
Number of Questions :	10
Number of Questions to be attempted :	10
Section Marks :	10
Enable Mark as Answered Mark for Review and Clear Response :	Yes
Sub-Section Number :	1
Sub-Section Id :	5406261187
Question Shuffling Allowed :	Yes

Question Number : 1 Question Id : 54062619838 Question Type : MCQ Option Shuffling : Yes Is Question Mandatory : No Option Orientation : Vertical  
Correct Marks : 1 Wrong Marks : 0.33

Who among the following freedom fighters is popularly known as ‘Shahid-e-Azam’?

Options :

1. ❌ Subhash Chandra Bose

2. ✖ Sardar Vallabhbhai Patel
3. ✖ Sardar Udham Singh
4. ✔ Bhagat Singh

**Question Number : 2 Question Id : 54062619839 Question Type : MCQ Option Shuffling : Yes Is**

**Question Mandatory : No Option Orientation : Vertical**

**Correct Marks : 1 Wrong Marks : 0.33**

Which of the following was the capital of the Kakatiya dynasty?

**Options :**

1. ✖ Bhubaneswar
2. ✖ Hyderabad
3. ✔ Warangal
4. ✖ Vijayawada

**Question Number : 3 Question Id : 54062619840 Question Type : MCQ Option Shuffling : Yes Is**

**Question Mandatory : No Option Orientation : Vertical**

**Correct Marks : 1 Wrong Marks : 0.33**

The memorial of \_\_\_\_\_ is named 'Shanti Van'.

**Options :**

1. ✔ Jawaharlal Nehru
2. ✖ Sardar Vallabhbhai Patel
3. ✖ Lal Bahadur Shastri
4. ✖ Bal Gangadhar Tilak

**Question Number : 4 Question Id : 54062619841 Question Type : MCQ Option Shuffling : Yes Is**

**Question Mandatory : No Option Orientation : Vertical**

**Correct Marks : 1 Wrong Marks : 0.33**

The river Krishna originates from which of the following places?

**Options :**

1. ✖ Trimbakeshwar

2. ✓ Mahabaleshwar

3. ✗ Talakaveri

4. ✗ Vijayawada

**Question Number : 5 Question Id : 54062619842 Question Type : MCQ Option Shuffling : Yes Is**

**Question Mandatory : No Option Orientation : Vertical**

**Correct Marks : 1 Wrong Marks : 0.33**

Which of the following countries capital city is Lisbon?

**Options :**

1. ✗ Senegal

2. ✓ Portugal

3. ✗ Bulgaria

4. ✗ Ethiopia

**Question Number : 6 Question Id : 54062619843 Question Type : MCQ Option Shuffling : Yes Is**

**Question Mandatory : No Option Orientation : Vertical**

**Correct Marks : 1 Wrong Marks : 0.33**

Swami Vivekananda addressed in the PARLIAMANT OF WORLD RELIGION in the year.

**Options :**

1. ✗ 1897

2. ✓ 1893

3. ✗ 1899

4. ✗ 1886

**Question Number : 7 Question Id : 54062619844 Question Type : MCQ Option Shuffling : Yes Is**

**Question Mandatory : No Option Orientation : Vertical**

**Correct Marks : 1 Wrong Marks : 0.33**

Who composed the famous Bengali song VANDE MATARAM?

**Options :**

1. ✓ Bankim Chandra Chattopadhyay

2. ✖ Rabindranath Thakur
3. ✖ Bibhuti Bhushan Bandyopadhyay
4. ✖ Sarat Chandra Chattopadhyay

**Question Number : 8 Question Id : 54062619845 Question Type : MCQ Option Shuffling : Yes Is**

**Question Mandatory : No Option Orientation : Vertical**

**Correct Marks : 1 Wrong Marks : 0.33**

Who wrote the novel Gora?

**Options :**

1. ✖ Sarat Chandra Chattopadhyay
2. ✔ Rabindranath Thakur
3. ✖ Bankim Chandra Chattopadhyay
4. ✖ Ashapurna Devi

**Question Number : 9 Question Id : 54062619846 Question Type : MCQ Option Shuffling : Yes Is**

**Question Mandatory : No Option Orientation : Vertical**

**Correct Marks : 1 Wrong Marks : 0.33**

In which year the capital of India was shifted from Kolkata to Delhi?

**Options :**

1. ✖ 1901
2. ✖ 1907
3. ✔ 1911
4. ✖ 1917

**Question Number : 10 Question Id : 54062619847 Question Type : MCQ Option Shuffling : Yes**

**Is Question Mandatory : No Option Orientation : Vertical**

**Correct Marks : 1 Wrong Marks : 0.33**

Who established the Missionaries of Charity in Kolkata?

**Options :**

1. ✖ Sister Nibedita

2. ✖ Sister Nirmala
3. ✔ Mother Teresa
4. ✖ Sarojini Naidu

## Reasoning

Section Id :	540626987
Section Number :	2
Section type :	Online
Mandatory or Optional :	Mandatory
Number of Questions :	10
Number of Questions to be attempted :	10
Section Marks :	10
Enable Mark as Answered Mark for Review and Clear Response :	Yes
Sub-Section Number :	1
Sub-Section Id :	5406261188
Question Shuffling Allowed :	Yes

**Question Number : 11 Question Id : 54062619848 Question Type : MCQ Option Shuffling : Yes**

**Is Question Mandatory : No Option Orientation : Vertical**

**Correct Marks : 1 Wrong Marks : 0.33**

Select the letter-cluster from among the given options that can replace the question mark (?) in the following series.

LGT, OIU, RKV, UMW, ?

**Options :**

1. ✖ YOX
2. ✔ XOX
3. ✖ WXY

4. ✖ XPW

**Question Number : 12 Question Id : 54062619849 Question Type : MCQ Option Shuffling : Yes**  
**Is Question Mandatory : No Option Orientation : Vertical**

**Correct Marks : 1 Wrong Marks : 0.33**

Four pairs of letter-clusters have been given, out of which three are alike in some manner and one is different. Select the one that is different.

**Options :**

- 1. ✖ GMS : JPV
- 2. ✖ FKT : INW
- 3. ✖ BSQ : EVT
- 4. ✔ DGN : GKQ

**Question Number : 13 Question Id : 54062619850 Question Type : MCQ Option Shuffling : Yes**  
**Is Question Mandatory : No Option Orientation : Vertical**

**Correct Marks : 1 Wrong Marks : 0.33**

Select the option that is related to the third word in the same way as the second word is related to the first word.

Huge : Vast :: Destroy : ?

**Options :**

- 1. ✖ Raise
- 2. ✔ Ruin
- 3. ✖ Build
- 4. ✖ Restore

**Question Number : 14 Question Id : 54062619851 Question Type : MCQ Option Shuffling : Yes**  
**Is Question Mandatory : No Option Orientation : Vertical**

**Correct Marks : 1 Wrong Marks : 0.33**

Select the number from among the given options that can replace the question mark (?) in the following series.

10, 28, 54, 88, ?

**Options :**

- 1. ✖ 97
- 2. ✖ 109
- 3. ✔ 130
- 4. ✖ 141

**Question Number : 15 Question Id : 54062619852 Question Type : MCQ Option Shuffling : Yes**  
**Is Question Mandatory : No Option Orientation : Vertical**

**Correct Marks : 1 Wrong Marks : 0.33**

Select the option that is related to the third number in the same way as the second number is related to the first number.

19 : 364 :: 22 : ?

**Options :**

- 1. ✖ 377
- 2. ✖ 428
- 3. ✔ 487
- 4. ✖ 502

**Question Number : 16 Question Id : 54062619853 Question Type : MCQ Option Shuffling : Yes**  
**Is Question Mandatory : No Option Orientation : Vertical**

**Correct Marks : 1 Wrong Marks : 0.33**

In a certain code, if '%' means 'addition', '@' means 'multiplication', '\$' means 'division' and '&' means 'subtraction', then find the value of  $248 \$ 8 @ 3 \% 78 \& 39$ .

**Options :**

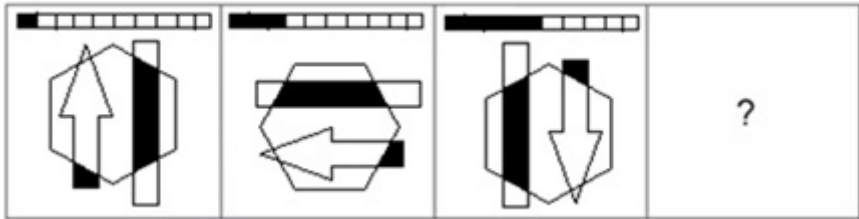
- 1. ✖ 105
- 2. ✖ 115
- 3. ✖ 125
- 4. ✔ 132



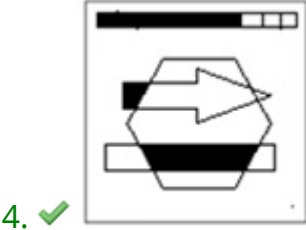
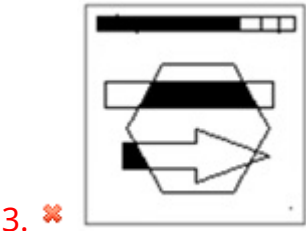
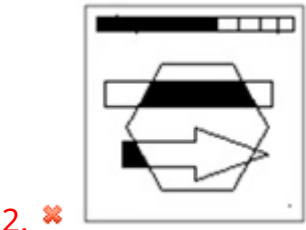
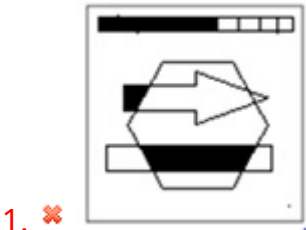
Question Number : 17 Question Id : 54062619854 Question Type : MCQ Option Shuffling : Yes  
Is Question Mandatory : No Option Orientation : Vertical

Correct Marks : 1 Wrong Marks : 0.33

Select the figure from among the given options that can replace the question mark (?) in the following series.



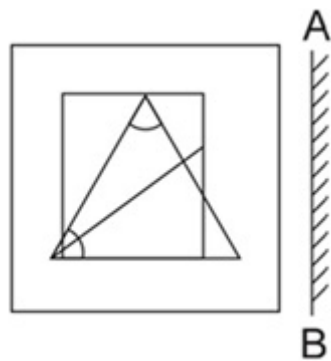
Options :



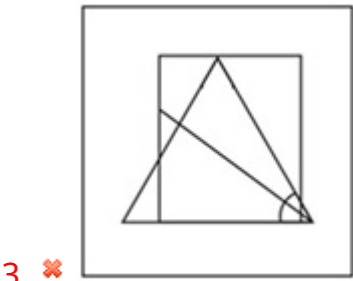
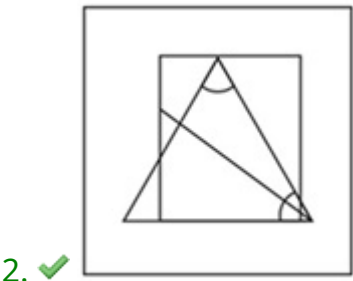
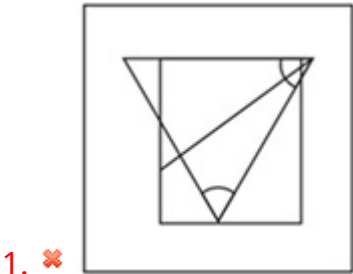
Question Number : 18 Question Id : 54062619855 Question Type : MCQ Option Shuffling : Yes  
Is Question Mandatory : No Option Orientation : Vertical

Correct Marks : 1 Wrong Marks : 0.33

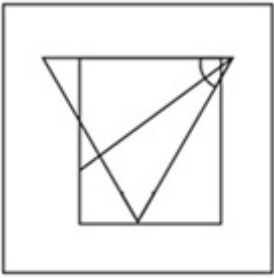
Select the correct mirror image of the given figure when the mirror is placed at AB as shown.



Options :



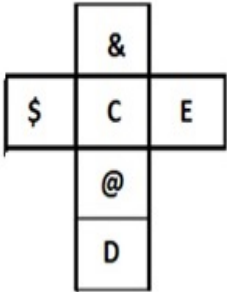
4. ✖



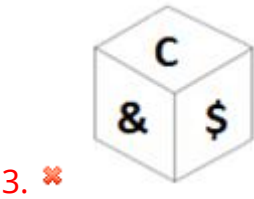
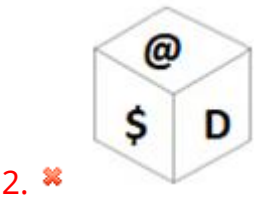
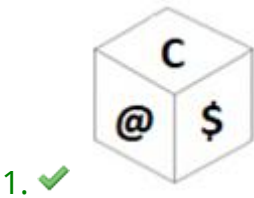
Question Number : 19 Question Id : 54062619856 Question Type : MCQ Option Shuffling : Yes  
Is Question Mandatory : No Option Orientation : Vertical

Correct Marks : 1 Wrong Marks : 0.33

Select the box that CANNOT be formed by folding the given sheet along the lines.



Options :

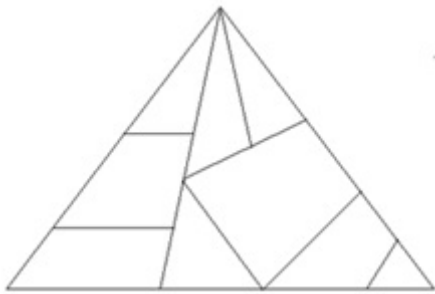




**Question Number : 20 Question Id : 54062619857 Question Type : MCQ Option Shuffling : Yes**  
**Is Question Mandatory : No Option Orientation : Vertical**

**Correct Marks : 1 Wrong Marks : 0.33**

How many triangles are there in the given figure?



**Options :**

- 1. ✖ 9
- 2. ✖ 10
- 3. ✔ 11
- 4. ✖ 12

## Quantitative Aptitude

Section Id :	540626988
Section Number :	3
Section type :	Online
Mandatory or Optional :	Mandatory
Number of Questions :	20
Number of Questions to be attempted :	20
Section Marks :	20

Enable Mark as Answered Mark for Review and

Yes

Clear Response :

Sub-Section Number :

1

Sub-Section Id :

5406261189

Question Shuffling Allowed :

Yes

Question Number : 21 Question Id : 54062619858 Question Type : MCQ Option Shuffling : Yes

Is Question Mandatory : No Option Orientation : Vertical

Correct Marks : 1 Wrong Marks : 0.33

Find the value of  $15.3^2 - 30.6 \times 10.8 + 10.8^2$ .

Options :

1. ✖ 21.25

2. ✔ 20.25

3. ✖ 19.75

4. ✖ 20.45

Question Number : 22 Question Id : 54062619859 Question Type : MCQ Option Shuffling : Yes

Is Question Mandatory : No Option Orientation : Vertical

Correct Marks : 1 Wrong Marks : 0.33

Sunil's salary is  $\frac{3}{4}$  of Rahul's salary and Sunil's salary is also  $\frac{6}{5}$  of Jiten's salary. What fraction of Jiten's salary is Rahul's salary?

Options :

1. ✔  $\frac{8}{5}$

2. ✖  $\frac{10}{9}$

3. ✖  $\frac{5}{2}$

4. ✖  $\frac{9}{10}$

**Question Number : 23 Question Id : 54062619860 Question Type : MCQ Option Shuffling : Yes**  
**Is Question Mandatory : No Option Orientation : Vertical**

**Correct Marks : 1 Wrong Marks : 0.33**

Find the smallest cubic number that is divisible by each of 12, 18 and 30.

**Options :**

1. ✖ 729000

2. ✖ 216000

3. ✔ 27000

4. ✖ 9000

**Question Number : 24 Question Id : 54062619861 Question Type : MCQ Option Shuffling : Yes**  
**Is Question Mandatory : No Option Orientation : Vertical**

**Correct Marks : 1 Wrong Marks : 0.33**

In a school, there were 240 students in Grade 6, 336 students in Grade 7 and 384 students in Grade 8. The students in each grade were put in various sections in their respective grades. However, across grades the number of students in each section was identical. What was the minimum number of sections in the school in these three grades put together?

**Options :**

1. ✖ 18

2. ✔ 20

3. ✖ 21

4. ✖ 22

Question Number : 25 Question Id : 54062619862 Question Type : MCQ Option Shuffling : Yes

Is Question Mandatory : No Option Orientation : Vertical

Correct Marks : 1 Wrong Marks : 0.33

The sum of 18% of  $x$  and 42% of  $y$  is equal to three-fourths of the sum of 20% of  $x$  and 60% of  $y$ . Find  $x : y$ .

Options :

1. ✔ 1 : 1

2. ✖ 3 : 2

3. ✖ 2 : 3

4. ✖ 3 : 4

Question Number : 26 Question Id : 54062619863 Question Type : MCQ Option Shuffling : Yes

Is Question Mandatory : No Option Orientation : Vertical

Correct Marks : 1 Wrong Marks : 0.33

A fruit seller was selling mangoes. He sold 80% of his mangoes at a 15% profit and the remaining 20% at a 10% loss. If he made an overall profit of ₹ 200, what was the total cost price of his mangoes?

Options :

1. ✖ ₹ 2,150

2. ✖ ₹ 2,200

3. ✖ ₹ 1,800

4. ✔ ₹ 2,000

**Question Number : 27 Question Id : 54062619864 Question Type : MCQ Option Shuffling : Yes**  
**Is Question Mandatory : No Option Orientation : Vertical**

**Correct Marks : 1 Wrong Marks : 0.33**

Ravi and Arjun invested in a business in the ratio 5 : 3. The duo decides to contribute 15% of the profit to charity and divide the rest in the ratio of the sums invested. If Ravi's share of the profit in a particular period was ₹ 2,125, what was the total profit during that period?

**Options :**

- 1. ✖ ₹ 3,400
- 2. ✖ ₹ 3,600
- 3. ✔ ₹ 4,000
- 4. ✖ ₹ 4,200

**Question Number : 28 Question Id : 54062619865 Question Type : MCQ Option Shuffling : Yes**  
**Is Question Mandatory : No Option Orientation : Vertical**

**Correct Marks : 1 Wrong Marks : 0.33**

The simple interest for two years on ₹ 1,500 was ₹ 240. What was the rate of simple interest per annum?

**Options :**

- 1. ✖ 6%
- 2. ✔ 8%
- 3. ✖ 9%
- 4. ✖ 10%



**Question Number : 29 Question Id : 54062619866 Question Type : MCQ Option Shuffling : Yes**

**Is Question Mandatory : No Option Orientation : Vertical**

**Correct Marks : 1 Wrong Marks : 0.33**

Which of the following numbers is divisible by 15?

**Options :**

1. ✖ 3325

2. ✖ 4325

3. ✔ 5325

4. ✖ 6325

**Question Number : 30 Question Id : 54062619867 Question Type : MCQ Option Shuffling : Yes**

**Is Question Mandatory : No Option Orientation : Vertical**

**Correct Marks : 1 Wrong Marks : 0.33**

A vehicle, travelling at a constant speed covered 200 m in 9 seconds. At the same speed, how much will the vehicle travel in 1 hour?

**Options :**

1. ✔ 80 km

2. ✖ 75 km

3. ✖ 90 km

4. ✖ 72 km

**Question Number : 31 Question Id : 54062619868 Question Type : MCQ Option Shuffling : Yes**

**Is Question Mandatory : No Option Orientation : Vertical**

**Correct Marks : 1 Wrong Marks : 0.33**

In 1 hour, Laxman had to cover a distance of 70 km. In the first 15 minutes, he covered only 11.5 km. What should be Laxman's speed (in km/h) for the rest of the journey so that he reaches the destination exactly on time?

**Options :**

1. ✖ 81

2. ✖ 76

3. ✖ 80

4. ✔ 78

**Question Number : 32 Question Id : 54062619869 Question Type : MCQ Option Shuffling : Yes**  
**Is Question Mandatory : No Option Orientation : Vertical**

**Correct Marks : 1 Wrong Marks : 0.33**

The average of 37, 29 and another number is 36. What is the third number?

**Options :**

1. ✖ 39

2. ✖ 41

3. ✔ 42

4. ✖ 40

**Question Number : 33 Question Id : 54062619870 Question Type : MCQ Option Shuffling : Yes**  
**Is Question Mandatory : No Option Orientation : Vertical**

**Correct Marks : 1 Wrong Marks : 0.33**

Find the simple interest on ₹ 1,750 for 4 years, if the rate of simple interest is 9.5% per annum.

**Options :**

1. ✖ ₹ 680

2. ✖ ₹ 675

3. ✔ ₹ 665

4. ✖ ₹ 686

**Question Number : 34 Question Id : 54062619871 Question Type : MCQ Option Shuffling : Yes**

**Is Question Mandatory : No Option Orientation : Vertical**

**Correct Marks : 1 Wrong Marks : 0.33**

The LCM of 15 and another number is 45 and their HCF is 3. Find the value of the other number.

**Options :**

1. ✖ 3

2. ✔ 9

3. ✖ 12

4. ✖ 45

**Question Number : 35 Question Id : 54062619872 Question Type : MCQ Option Shuffling : Yes**

**Is Question Mandatory : No Option Orientation : Vertical**

**Correct Marks : 1 Wrong Marks : 0.33**

70% of a number is 161. What is the number?

**Options :**

1. ✖ 240

2. ✔ 230

3. ✖ 250

4. ✖ 225

Question Number : 36 Question Id : 54062619873 Question Type : MCQ Option Shuffling : Yes

Is Question Mandatory : No Option Orientation : Vertical

Correct Marks : 1 Wrong Marks : 0.33

By selling an item for ₹ 200, a person incurred a loss of 37.5%. What is the cost price of the item?

Options :

1. ✖ ₹ 280

2. ✖ ₹ 300

3. ✔ ₹ 320

4. ✖ ₹ 325

Question Number : 37 Question Id : 54062619874 Question Type : MCQ Option Shuffling : Yes

Is Question Mandatory : No Option Orientation : Vertical

Correct Marks : 1 Wrong Marks : 0.33

$492x7$  is divisible by 9. What is the value of  $x$ ?

Options :

1. ✖ 3

2. ✖ 4

3. ✔ 5

4. ✖ 8

**Question Number : 38 Question Id : 54062619875 Question Type : MCQ Option Shuffling : Yes**  
**Is Question Mandatory : No Option Orientation : Vertical**

**Correct Marks : 1 Wrong Marks : 0.33**

Two numbers are in the ratio 2 : 5. What will be the ratio of 60% of the first number to 15% of the second?

**Options :**

1. ✓ 8 : 5

2. ✗ 4 : 3

3. ✗ 7 : 5

4. ✗ 2 : 1

**Question Number : 39 Question Id : 54062619876 Question Type : MCQ Option Shuffling : Yes**  
**Is Question Mandatory : No Option Orientation : Vertical**

**Correct Marks : 1 Wrong Marks : 0.33**

The area of a rectangle is  $40 \text{ m}^2$  and its length is 8 m. What is the perimeter of the rectangle?

**Options :**

1. ✗ 20 m

2. ✓ 26 m

3. ✗ 28 m

4. ✗ 32 m

**Question Number : 40 Question Id : 54062619877 Question Type : MCQ Option Shuffling : Yes**  
**Is Question Mandatory : No Option Orientation : Vertical**

Correct Marks : 1 Wrong Marks : 0.33

The perimeter of a rectangle is 40 m and its length is 15 m. What is the area of the rectangle?

Options :

1. ✖ 90 m<sup>2</sup>

2. ✖ 67.5 m<sup>2</sup>

3. ✔ 75 m<sup>2</sup>

4. ✖ 60 m<sup>2</sup>

General English

Section Id :	540626989
Section Number :	4
Section type :	Online
Mandatory or Optional :	Mandatory
Number of Questions :	20
Number of Questions to be attempted :	20
Section Marks :	20
Enable Mark as Answered Mark for Review and Clear Response :	Yes
Sub-Section Number :	1
Sub-Section Id :	5406261190
Question Shuffling Allowed :	Yes

Question Number : 41 Question Id : 54062619878 Question Type : MCQ Option Shuffling : Yes  
Is Question Mandatory : No Option Orientation : Vertical  
Correct Marks : 1 Wrong Marks : 0.33

Select the option that can be used as a one-word substitute for the given group of words.

One who loves to speak

**Options :**

1. ✖ Quixotic
2. ✖ Intrepid
3. ✔ Loquacious
4. ✖ Ambivert

**Question Number : 42 Question Id : 54062619879 Question Type : MCQ Option Shuffling : Yes**

**Is Question Mandatory : No Option Orientation : Vertical**

**Correct Marks : 1 Wrong Marks : 0.33**

Which of the following is a collocation?

**Options :**

1. ✖ Make a difference
2. ✔ Have progress
3. ✖ Come in time
4. ✖ Get a bus

**Question Number : 43 Question Id : 54062619880 Question Type : MCQ Option Shuffling : Yes**

**Is Question Mandatory : No Option Orientation : Vertical**

**Correct Marks : 1 Wrong Marks : 0.33**

Select the most appropriate option to fill in the blanks.

Research on the effect of \_\_\_\_ exposure to ionizing radiation on insects is \_\_\_\_\_, but most experts support the idea that bees and other invertebrates are relatively \_\_\_\_\_ to radioactive stress.

**Options :**

1. ✖ intermittent; reduced; quiet
2. ✖ chronic; unlimited; quite
3. ✖ complex; better; resilient

4. ✓ chronic; limited; resilient

**Question Number : 44 Question Id : 54062619881 Question Type : MCQ Option Shuffling : Yes**

**Is Question Mandatory : No Option Orientation : Vertical**

**Correct Marks : 1 Wrong Marks : 0.33**

Select the option that can be used as a one-word substitute for the given group of words.

Gradually gather or acquire something

**Options :**

1. ✗ Associate

2. ✗ Inherit

3. ✓ Accumulate

4. ✗ Addition

**Question Number : 45 Question Id : 54062619882 Question Type : MCQ Option Shuffling : Yes**

**Is Question Mandatory : No Option Orientation : Vertical**

**Correct Marks : 1 Wrong Marks : 0.33**

Select the most appropriate synonym of the given word.

Aromatic

**Options :**

1. ✗ Intense

2. ✗ Insipid

3. ✓ Fragrant

4. ✗ Briny

**Question Number : 46 Question Id : 54062619883 Question Type : MCQ Option Shuffling : Yes**

**Is Question Mandatory : No Option Orientation : Vertical**

**Correct Marks : 1 Wrong Marks : 0.33**

Select the most appropriate synonym of the given word.



Translucent

**Options :**

1. ✖ Obscure
2. ✖ Sepulchral
3. ✖ Glistening
4. ✔ Clear

**Question Number : 47 Question Id : 54062619884 Question Type : MCQ Option Shuffling : Yes**

**Is Question Mandatory : No Option Orientation : Vertical**

**Correct Marks : 1 Wrong Marks : 0.33**

Select the most appropriate synonym of the underlined word.

When you are feeling strong about some things, you need to argue with conviction.

**Options :**

1. ✖ Exacerbation
2. ✖ Gratification
3. ✖ Blarney
4. ✔ Belief

**Question Number : 48 Question Id : 54062619885 Question Type : MCQ Option Shuffling : Yes**

**Is Question Mandatory : No Option Orientation : Vertical**

**Correct Marks : 1 Wrong Marks : 0.33**

Select the most appropriate synonym of the underlined word.

The indigenous people were very unhappy with the local administration over their strict laws.

**Options :**

1. ✔ Native
2. ✖ Angry
3. ✖ Disappointed
4. ✖ Visiting

**Question Number : 49 Question Id : 54062619886 Question Type : MCQ Option Shuffling : Yes**

**Is Question Mandatory : No Option Orientation : Vertical**

**Correct Marks : 1 Wrong Marks : 0.33**

Select the most appropriate ANTONYM of the given word.

Wild

**Note: For this question, discrepancy is found in question/answer. Full Marks is being awarded to all candidates.**

**Options :**

1. Quiet
2. Domestic
3. Tame
4. Timid

**Question Number : 50 Question Id : 54062619887 Question Type : MCQ Option Shuffling : Yes**

**Is Question Mandatory : No Option Orientation : Vertical**

**Correct Marks : 1 Wrong Marks : 0.33**

Select the most appropriate ANTONYM of the underlined word.

The spark from the cigarette ignited everything in the garbage.

**Options :**

1. ✖ Burnt
2. ✖ Muted
3. ✔ Extinguished
4. ✖ Dampened

**Question Number : 51 Question Id : 54062619888 Question Type : MCQ Option Shuffling : Yes**

**Is Question Mandatory : No Option Orientation : Vertical**

**Correct Marks : 1 Wrong Marks : 0.33**

Select the most appropriate ANTONYM of the underlined word.

Many people appreciate Radha as she is very diligent in her work.

**Options :**

1. ✖ Careful
2. ✖ Disturbed
3. ✖ Forced
4. ✔ Careless

**Question Number : 52 Question Id : 54062619889 Question Type : MCQ Option Shuffling : Yes**

**Is Question Mandatory : No Option Orientation : Vertical**

**Correct Marks : 1 Wrong Marks : 0.33**

Select the most appropriate ANTONYM of the underlined word.

Chola Empire reached its zenith under the King Rajaraja Chola.

**Options :**

1. ✖ Peak
2. ✖ Zeal
3. ✖ Apogee
4. ✔ Nadir

**Question Number : 53 Question Id : 54062619890 Question Type : MCQ Option Shuffling : Yes**

**Is Question Mandatory : No Option Orientation : Vertical**

**Correct Marks : 1 Wrong Marks : 0.33**

Select the most appropriate option to fill in the blank.

My friend has gone to Coimbatore, \_\_\_\_\_ is his native place.

**Options :**

1. ✖ that

2. ✓ which

3. ✗ where

4. ✗ while

**Question Number : 54 Question Id : 54062619891 Question Type : MCQ Option Shuffling : Yes**

**Is Question Mandatory : No Option Orientation : Vertical**

**Correct Marks : 1 Wrong Marks : 0.33**

Select the most appropriate option to fill in the blank.

\_\_\_\_\_ white tigers are protected, they will become extinct.

**Options :**

1. ✗ Though

2. ✓ Unless

3. ✗ Until

4. ✗ Since

**Question Number : 55 Question Id : 54062619892 Question Type : MCQ Option Shuffling : Yes**

**Is Question Mandatory : No Option Orientation : Vertical**

**Correct Marks : 1 Wrong Marks : 0.33**

Select the most appropriate option to fill in the blank.

If I had not read the original book, \_\_\_\_\_.

**Options :**

1. ✗ I would enjoy the movie

2. ✗ I will enjoy the movie

3. ✗ I wouldn't have enjoy the movie

4. ✓ I would have enjoyed the movie

**Question Number : 56 Question Id : 54062619893 Question Type : MCQ Option Shuffling : Yes**

**Is Question Mandatory : No Option Orientation : Vertical**

**Correct Marks : 1 Wrong Marks : 0.33**

Select the most appropriate option to fill in the blanks.

One million people have now been lost \_\_\_\_\_ COVID-19 and many more are suffering because \_\_\_\_\_ the pandemic.

**Options :**

1. ✖ by; off
2. ✔ to; of
3. ✖ in; by
4. ✖ for; of

**Question Number : 57 Question Id : 54062619894 Question Type : MCQ Option Shuffling : Yes**

**Is Question Mandatory : No Option Orientation : Vertical**

**Correct Marks : 1 Wrong Marks : 0.33**

Select the most appropriate option to fill in the blanks.

Neither my brother nor my sisters \_\_\_\_\_ attending the function. It \_\_\_\_\_ not safe to attend such gatherings in pandemic times.

**Options :**

1. ✔ are; is
2. ✖ are; are
3. ✖ is; are
4. ✖ is; is

**Question Number : 58 Question Id : 54062619895 Question Type : MCQ Option Shuffling : Yes**

**Is Question Mandatory : No Option Orientation : Vertical**

**Correct Marks : 1 Wrong Marks : 0.33**

Select the antecedent of the underlined pronoun in the following sentence.

As he came out of the hotel, John noticed a poor man near the bridge who looked as if he had not eaten for days.

**Options :**

1. ✓ John; poor man
2. ✗ poor man; John
3. ✗ John; John
4. ✗ poor man; poor man

**Question Number : 59 Question Id : 54062619896 Question Type : MCQ Option Shuffling : Yes**  
**Is Question Mandatory : No Option Orientation : Vertical**

**Correct Marks : 1 Wrong Marks : 0.33**

Select the sentence from the given options that has an INCORRECT use of tense.

**Options :**

1. ✗ When I opened my eyes, I saw a strange sight of a donkey wearing a hat.
2. ✗ We were watching a movie when it started to rain.
3. ✗ It has been raining since morning.
4. ✓ He had passed his tenth board exam in 2019.

**Question Number : 60 Question Id : 54062619897 Question Type : MCQ Option Shuffling : Yes**  
**Is Question Mandatory : No Option Orientation : Vertical**

**Correct Marks : 1 Wrong Marks : 0.33**

Select the sentence from the given options that contains a grammatical error.

**Options :**

1. ✓ I did not see Anitha since last month.
2. ✗ The teachers asked us to submit the assignments within the deadline.
3. ✗ You have to write daily to improve your writing style.
4. ✗ The candidate won the election with a huge margin.

## **Data Analysis Data Interpretation & Data Sufficiency**

**Section Id :**

540626990

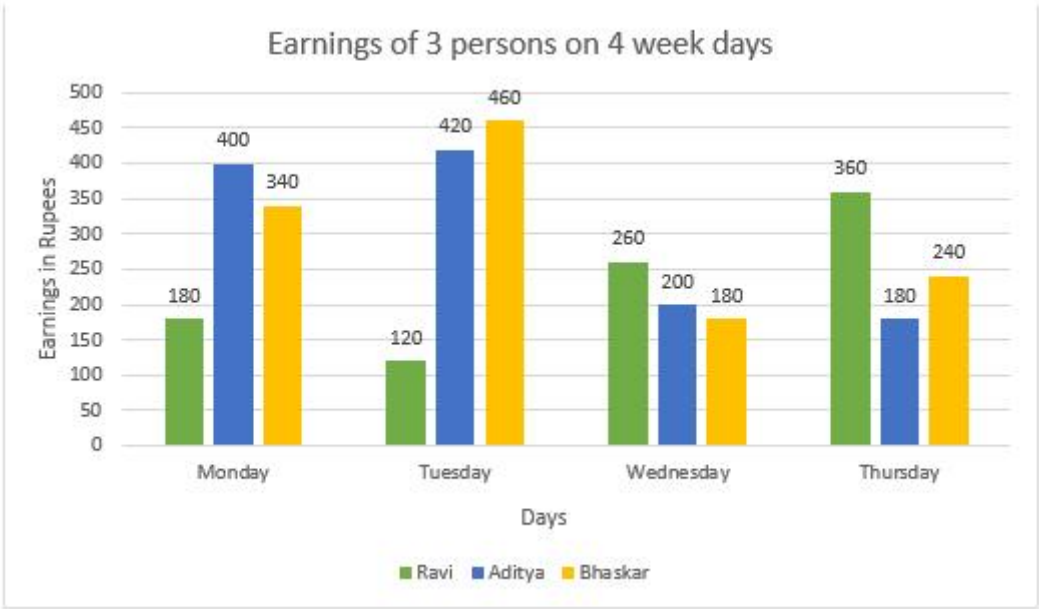
**Section Number :**

5

Section type :	Online
Mandatory or Optional :	Mandatory
Number of Questions :	5
Number of Questions to be attempted :	5
Section Marks :	5
Enable Mark as Answered Mark for Review and Clear Response :	Yes
Sub-Section Number :	1
Sub-Section Id :	5406261191
Question Shuffling Allowed :	Yes

**Question Number : 61 Question Id : 54062619898 Question Type : MCQ Option Shuffling : Yes**  
**Is Question Mandatory : No Option Orientation : Vertical**  
**Correct Marks : 1 Wrong Marks : 0.33**

The following bar graph gives the information regarding the earnings of 3 persons (Ravi, Aditya and Bhaskar) on 4-week days. Let us assume that they work only 4 days in a week.



If Ravi gave half of his income on each day to Bhaskar, then how much does Bhaskar's weekly income become?

**Note: For this question, discrepancy is found in**

question/answer. Full Marks is being awarded to all candidates.

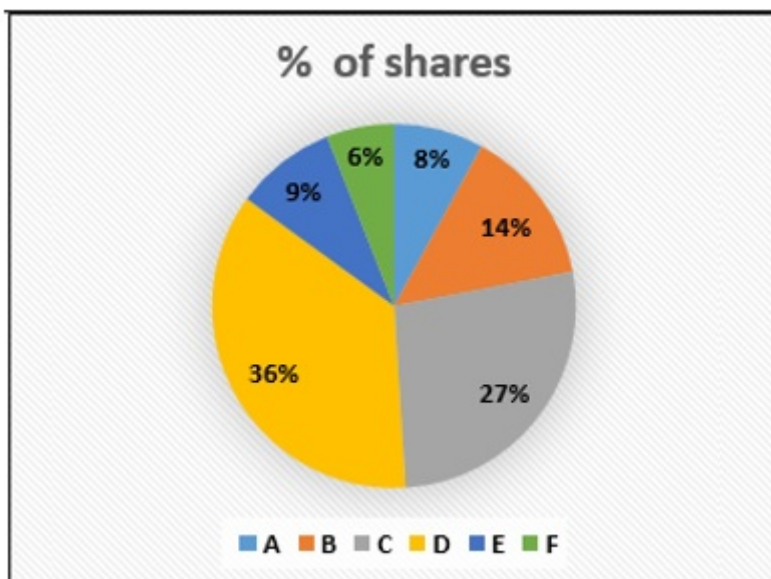
**Options :**

1. Rs. 1,350
2. Rs. 1,670
3. Rs. 1,250
4. Rs. 1,375

**Question Number : 62 Question Id : 54062619899 Question Type : MCQ Option Shuffling : Yes Is Question Mandatory : No Option Orientation : Vertical**

**Correct Marks : 1 Wrong Marks : 0.33**

Following is the information about the percentage shares of partners in a company.



If the company has issued eight lakh shares between its six partners and if B offers to sell 24,000 of his shares to E, then the percentage of shares that E will hold is:

**Options :**

1. ✓ 12 percent
2. ✗ 15 percent
3. ✗ 10 percent



4. ✖ 16 percent

Question Number : 63 Question Id : 54062619900 Question Type : MCQ Option Shuffling : Yes  
Is Question Mandatory : No Option Orientation : Vertical

Correct Marks : 1 Wrong Marks : 0.33

The following line chart shows the ratio of sales to production of two companies from 2014 to 2019. (When the ratio is more than 1, it is assumed that old stock is used.)



The production of company P in the year 2015 is 20,000 and the sales of company Q in the year 2018 is 14,000. What is the ratio of the difference in sales and production of company P in the year 2015 and company Q in the year 2018?

Note: For this question, discrepancy is found in question/answer. Full Marks is being awarded to all candidates.

Options :

1. 3 : 4
2. 5 : 3
3. 1 : 5

4. 2 : 5

**Question Number : 64 Question Id : 54062619901 Question Type : MCQ Option Shuffling : Yes**  
**Is Question Mandatory : No Option Orientation : Vertical**

**Correct Marks : 1 Wrong Marks : 0.33**

Following is the data of five wards and the voters.

Wards	First time voters	Repeat voters
A	1440	8680
B	2480	10650
C	1680	18740
D	3600	21900
E	5000	60480
Total	14200	120450

	First time voters	Repeat voters
Male voters	8720	62190
Female voters	5480	58260

Percentage of repeat male voters of all the voters is:

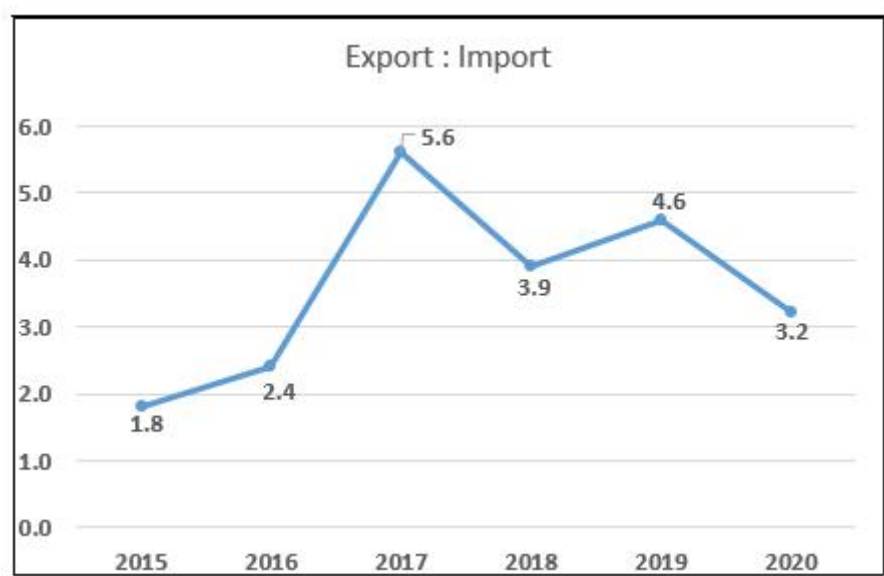
**Options :**

1. ✖ 42.48 percent
2. ✔ 46.19 percent
3. ✖ 48.94 percent
4. ✖ 40.37 percent

**Question Number : 65 Question Id : 54062619902 Question Type : MCQ Option Shuffling : Yes**  
**Is Question Mandatory : No Option Orientation : Vertical**

Correct Marks : 1 Wrong Marks : 0.33

The following line-graph shows the ratio of the amounts of Exports by a Company to the amount of Imports from that Company over the period from 2015 to 2020.



If the imports of the Company in 2018 was Rs. 280 crores, then the exports from the Company in 2018 was (in Crores):

Options :

- 1. ✖ 1,348
- 2. ✖ 948
- 3. ✖ 1,212
- 4. ✔ 1,092

## Computer Proficiency (MS-Office)

Section Id :	540626991
Section Number :	6
Section type :	Online
Mandatory or Optional :	Mandatory
Number of Questions :	20
Number of Questions to be attempted :	20
Section Marks :	20

**Enable Mark as Answered Mark for Review and**

Yes

**Clear Response :**

**Sub-Section Number :**

1

**Sub-Section Id :**

5406261192

**Question Shuffling Allowed :**

Yes

**Question Number : 66 Question Id : 54062619903 Question Type : MCQ Option Shuffling : Yes**

**Is Question Mandatory : No Option Orientation : Vertical**

**Correct Marks : 1 Wrong Marks : 0.33**

Which of the following software is also called a word processor?

**Options :**

1. ✖ Microsoft Paint
2. ✖ Microsoft Excel
3. ✔ Microsoft Word
4. ✖ Microsoft PowerPoint

**Question Number : 67 Question Id : 54062619904 Question Type : MCQ Option Shuffling : Yes**

**Is Question Mandatory : No Option Orientation : Vertical**

**Correct Marks : 1 Wrong Marks : 0.33**

What is the default name of a document created in Microsoft Word 2016?

**Options :**

1. ✔ Document1
2. ✖ Doc1
3. ✖ D1
4. ✖ WordDocument1

**Question Number : 68 Question Id : 54062619905 Question Type : MCQ Option Shuffling : Yes**

**Is Question Mandatory : No Option Orientation : Vertical**

**Correct Marks : 1 Wrong Marks : 0.33**

Which of the following keyboard shortcuts can be used to underline a selected piece of text in a

Microsoft Word document?

**Options :**

1.  Ctrl+U
2.  Alt+U
3.  Alt+Ctrl+U
4.  Ctrl+L





**Question Number : 69 Question Id : 54062619906 Question Type : MCQ Option Shuffling : Yes**

**Is Question Mandatory : No Option Orientation : Vertical**

**Correct Marks : 1 Wrong Marks : 0.33**

Which of the following commands is used to display paragraph markers and other markers in a Microsoft Word document?

**Options :**

1.  Bullets
2.  Show/Hide
3.  Change case
4.  Format painter

**Question Number : 70 Question Id : 54062619907 Question Type : MCQ Option Shuffling : Yes**

**Is Question Mandatory : No Option Orientation : Vertical**

**Correct Marks : 1 Wrong Marks : 0.33**

Features such as header, footer, page number and comment appear under the \_\_\_\_\_ menu tab in Microsoft Word 2016.

**Options :**

1.  File
2.  Review
3.  View
4.  Insert

**Question Number : 71 Question Id : 54062619908 Question Type : MCQ Option Shuffling : Yes**

**Is Question Mandatory : No Option Orientation : Vertical**

**Correct Marks : 1 Wrong Marks : 0.33**

In Microsoft Word 2016, the font sizes in the 'font' toolbar range from \_\_\_\_\_ points to \_\_\_\_\_ points.

**Options :**

1. ✖ 8; 96
2. ✔ 8; 72
3. ✖ 10; 96
4. ✖ 10; 72

**Question Number : 72 Question Id : 54062619909 Question Type : MCQ Option Shuffling : Yes**

**Is Question Mandatory : No Option Orientation : Vertical**

**Correct Marks : 1 Wrong Marks : 0.33**

In Microsoft Word 2016, the default line spacing of a document is \_\_\_\_\_.

**Note: For this question, discrepancy is found in question/answer. Full Marks is being awarded to all candidates.**

**Options :**

1. single
2. 1.5 lines
3. double
4. triple

**Question Number : 73 Question Id : 54062619910 Question Type : MCQ Option Shuffling : Yes**

**Is Question Mandatory : No Option Orientation : Vertical**

**Correct Marks : 1 Wrong Marks : 0.33**

What is the address of the first cell of a Microsoft Excel worksheet?

**Options :**

1. ✓ A1

2. ✗ B1

3. ✗ A2

4. ✗ 1A

**Question Number : 74 Question Id : 54062619911 Question Type : MCQ Option Shuffling : Yes**  
**Is Question Mandatory : No Option Orientation : Vertical**

**Correct Marks : 1 Wrong Marks : 0.33**

In Microsoft Excel, the \_\_\_\_\_ symbol is used as the first character to enter a formula in a cell.

**Options :**

1. ✓ =

2. ✗ \$

3. ✗ #

4. ✗ %

**Question Number : 75 Question Id : 54062619912 Question Type : MCQ Option Shuffling : Yes**  
**Is Question Mandatory : No Option Orientation : Vertical**

**Correct Marks : 1 Wrong Marks : 0.33**

In Microsoft Excel, the cell range P50:W99 contains \_\_\_\_\_ cells.

**Options :**

1. ✗ 8

2. ✗ 50

3. ✗ 58

4. ✓ 400

**Question Number : 76 Question Id : 54062619913 Question Type : MCQ Option Shuffling : Yes**  
**Is Question Mandatory : No Option Orientation : Vertical**

**Correct Marks : 1 Wrong Marks : 0.33**

With respect to Microsoft Excel, which of the following is the smallest object/entity?

**Options :**

1. ✖ Workbook
2. ✖ Worksheet
3. ✔ Cell
4. ✖ Cell range

**Question Number : 77 Question Id : 54062619914 Question Type : MCQ Option Shuffling : Yes**  
**Is Question Mandatory : No Option Orientation : Vertical**

**Correct Marks : 1 Wrong Marks : 0.33**

Which of the following actions will help rename a worksheet in Microsoft Excel 2016?

- (i) Right-click on the sheet tab and select 'rename'.
- (ii) Double-click on the sheet tab.

**Options :**

1. ✖ (i) only
2. ✖ (ii) only
3. ✔ Both (i) and (ii)
4. ✖ Neither (i) nor (ii)

**Question Number : 78 Question Id : 54062619915 Question Type : MCQ Option Shuffling : Yes**  
**Is Question Mandatory : No Option Orientation : Vertical**

**Correct Marks : 1 Wrong Marks : 0.33**

Consider that the cells A1, A2, B1 and B2 of a Microsoft Excel worksheet each contain the letters A, B, C and D, respectively. What will be the value of the following formula?

=COUNT(A1:B2)

**Options :**

1. ✖ 4
2. ✔ 0
3. ✖ Error
4. ✖ 2



**Question Number : 79 Question Id : 54062619916 Question Type : MCQ Option Shuffling : Yes**

**Is Question Mandatory : No Option Orientation : Vertical**

**Correct Marks : 1 Wrong Marks : 0.33**

Consider that all cells in the cell range A1:D5 are empty. What will be the value of the following Microsoft Excel formula?

=COUNT(A1:D5)

**Options :**

1. ✓ 0
2. ✗ 20
3. ✗ 9
4. ✗ Error

**Question Number : 80 Question Id : 54062619917 Question Type : MCQ Option Shuffling : Yes**

**Is Question Mandatory : No Option Orientation : Vertical**

**Correct Marks : 1 Wrong Marks : 0.33**

Which of the following is a software program developed by Microsoft to produce effective presentations?

**Options :**

1. ✓ Microsoft PowerPoint
2. ✗ Microsoft Paint
3. ✗ Notepad
4. ✗ WordPad

**Question Number : 81 Question Id : 54062619918 Question Type : MCQ Option Shuffling : Yes**

**Is Question Mandatory : No Option Orientation : Vertical**

**Correct Marks : 1 Wrong Marks : 0.33**

Commands such as cut, copy and paste appear under which of the following command groups in Microsoft PowerPoint 2016?

**Options :**

1. ✓ Clipboard

2. ✖ Font
3. ✖ Paragraph
4. ✖ Slides

**Question Number : 82 Question Id : 54062619919 Question Type : MCQ Option Shuffling : Yes**  
**Is Question Mandatory : No Option Orientation : Vertical**  
**Correct Marks : 1 Wrong Marks : 0.33**

The 'Find and Replace' command appears as a part of the \_\_\_\_\_ command group in Microsoft PowerPoint 2016.

**Options :**

1. ✖ Clipboard
2. ✖ Drawing
3. ✔ Editing
4. ✖ Slides

**Question Number : 83 Question Id : 54062619920 Question Type : MCQ Option Shuffling : Yes**  
**Is Question Mandatory : No Option Orientation : Vertical**  
**Correct Marks : 1 Wrong Marks : 0.33**

Which of the following menu tabs contains options such as spelling, translate and compare in Microsoft PowerPoint 2016?

**Options :**

1. ✖ View
2. ✔ Review
3. ✖ Transitions
4. ✖ Animations

**Question Number : 84 Question Id : 54062619921 Question Type : MCQ Option Shuffling : Yes**  
**Is Question Mandatory : No Option Orientation : Vertical**  
**Correct Marks : 1 Wrong Marks : 0.33**

Which of the following keyboard shortcuts can be used to select all text in a text box, all objects on

a slide or all slides in a presentation?

**Options :**

1. ✖ Ctrl+S
2. ✔ Ctrl+A
3. ✖ Alt+S
4. ✖ Alt+A

**Question Number : 85 Question Id : 54062619922 Question Type : MCQ Option Shuffling : Yes**

**Is Question Mandatory : No Option Orientation : Vertical**

**Correct Marks : 1 Wrong Marks : 0.33**

Which of the following keyboard shortcuts can be used to start presentation mode from the current slide?

**Options :**

1. ✖ F5
2. ✔ Shift+F5
3. ✖ Ctrl+F5
4. ✖ Shift+F3